



HOLIDAY HOMEWORK

2023

GRADE-2



ENGLISH

1. Write a story about a talking animal.

2. Write a list of your favourite things to do in the summer.

3. Write a poem about your favourite food.

[illegible]

4. Write a thank you note to someone who did something nice to you.

[illegible]

5. Write a paragraph about your favourite teacher.

6. Write the things you do every day.

7. Read the following passage :

A fox was very hungry. He looked for food. He saw a bunch of grapes. He jumped to get them. But grapes were very high. He could not reach them. At last he was tired. He said, "these grapes are sour." Saying so he went away.

Now answer the following questions:

1. Why did the fox look for food?
2. What did he see?
3. What did he do to get the grapes?
4. Could he get the grapes?
5. What did he say before he went away?



<hr/> <hr/> <hr/> <hr/> <hr/> <hr/> <hr/> <hr/> <hr/> <hr/>

8. Write a letter to a family member telling them about your day.

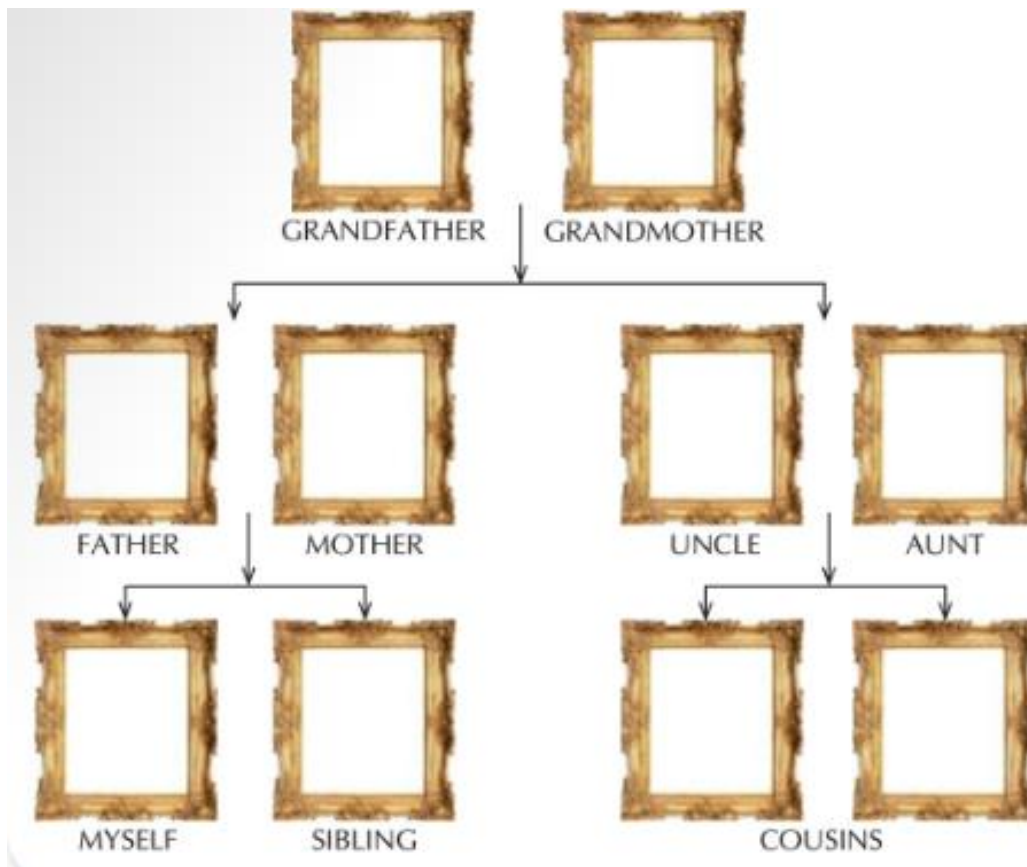
This image shows a single sheet of white paper with horizontal ruling lines. The lines are evenly spaced and run across the width of the page. There is a small dark mark or smudge near the bottom center of the page.

ENVIRONMENTAL SCIENCE

1. Identify the type of family given in the pictures and name them.



2. Paste the pictures of your family members in correct frames.



3. It is your grandmother's birthday today. You have decided to arrange a surprise party for her. Write the menu you have planned. Make a list of friends you are going to invite. Make another list of other arrangements you are going to make. Write about all this in the space provided below along with pictures of the party.

4. Look at the given image and answer the following questions.

a. Identify the type of family shown here.









b. Write the names of members of this type
Of family.

5. Name the parts of the body and color only those body parts which are not present in pairs.



6. Match the internal organs with their names.

	Lungs	
	Muscles	
	Brain	
	Stomach	
	Bones	
	Heart	

7. In the space provided below, Paste your three pictures of doing different activities. Under each picture, write which body part helped you in doing that activity.

8. Look at the given image and answer the questions that follow.



a. Which type of body part is this?

b. Name this body part and write its function.

9. Observe different type of birds in your area. Observe their habits and their nests. Draw a picture of your favorite bird and write a short paragraph on it.

हिंदी

१. आपने अपनी गर्मी की छुट्टियां किस प्रकार बिताई ? इस विषय पर १० पंक्तियों में निबंध लिखिए ।

२. अपने हिंदी -१ पुस्तक से "मम्मी भूख लगी है ", "सब्ज़ी ले लो सब्ज़ी " तथा "सच्चे मित्र " कवितायें याद करें।

MATHEMATICS

1. Solve the following.

1. Counting and Sequencing :

a) Write the numbers from 1 to 20.

b) Write the ordinal numbers from 1st to 10th.

2. Addition and Subtraction :

a) Solve the following problems :

i) $5 + 3 =$ _____

ii) $7 + 2 =$ _____

iii) $4 + 6 =$ _____

iv) $6 + 3 =$ _____

3. Solve the following subtraction problems:

i) $8 - 2 = \underline{\hspace{2cm}}$

ii) $10 - 5 = \underline{\hspace{2cm}}$

iii) $9 - 4 = \underline{\hspace{2cm}}$

iv) $9 - 5 = \underline{\hspace{2cm}}$

4. Number Patterns :

a) Fill in the missing numbers in the pattern :

i) $2, 4, 6, \underline{\hspace{1cm}}, 10$

ii) $3, 6, 9, \underline{\hspace{1cm}}, 15$

b) Write the next three numbers in the pattern :

1) $10, 20, 30, \underline{\hspace{1cm}}, \underline{\hspace{1cm}}, \underline{\hspace{1cm}}$

2) $5, 10, 15, \underline{\hspace{1cm}}, \underline{\hspace{1cm}}, \underline{\hspace{1cm}}$

3) $2, 4, 6, \underline{\hspace{1cm}}, \underline{\hspace{1cm}}, \underline{\hspace{1cm}}$

4) $3, 6, 9, \underline{\hspace{1cm}}, \underline{\hspace{1cm}}, \underline{\hspace{1cm}}$

5. Write the following numbers in ascending and descending order.

689, 436, 876, 564, 345

Ascending order : _____, _____, _____, _____, _____

Descending Order : _____, _____, _____, _____, _____

346, 986, 456, 567, 238

Ascending order : _____, _____, _____, _____, _____

Descending Order : _____, _____, _____, _____, _____

6. Regroup and write numeral.

i. 4 tens 2 ones = _____

ii. 4 tens 6 ones = _____

iii. 7 tens 3 ones = _____

iv. 9 tens 3 ones = _____

7. Fill in the blanks

i) _____ + 0 = 34

ii) 40 + _____ = 40

iii) 34 + _____ = 35

iv) 32 + _____ = 40

v) 40 - _____ = 30

vi) 20 - _____ = 10

8. Write the answers.

1. Write the greatest 3 – digit number.

2. Write the greatest 3 – digit number using the digits 6, 8, 9.

3. Write the smallest 4 digit number.

4. Form the greatest 2 – digit number using 1, 0, 8.

9. Complete the skip counting.

a. _____, 2, 4, _____, _____, 10, _____

b. _____, 22, 24, _____, _____, 30, _____

c. _____, 12, 14, _____, 18, _____, 22

d. 3, _____, _____, 12, _____, 18, _____, 24

10. Write the numerals.

a. Fifty two = _____

b. Thirty four = _____

c. Sixty six = _____

d. Eleven = _____

e. Seventy six = _____