



HOLIDAY HOMEWORK

2023

GRADE-3



ENGLISH

1. Write a story using at least five action verbs.

2. Write a list of at least ten things you are grateful for.

3. Write a list of adjective to describe your family members and use them to write a paragraph about them.

[illegible]

4. Write a list of your favourite words and use each in a sentence.

[illegible]

5. Write a speech about why it's important to be kind to other.

6. Write a descriptive paragraph about your favourite toy.

7. Read the following passage :

The sun rises every morning and sets every evening. When the sun rises, it brings light to the world. People wake up and start their daily work. They go to schools, offices, and shops. Birds start chirping and animals come out of their hiding places. Plants, flowers, and trees get energy from the sun and start growing. The sun continues to shine until the evening when it sets. It gives way to the moon and stars that take over the night sky.

Now answer the following questions:

1. What happens when the sun rises in the morning?
2. Where do people usually go during the day?
3. What happens to plants, flowers, and trees when the sun shines?
4. What takes over the night sky when the sun sets?
5. Why is the sun important for our world?

<hr/> <hr/> <hr/> <hr/> <hr/> <hr/> <hr/> <hr/> <hr/> <hr/>

8. Picture based story writing Look at the picture and develop a story by using the words given in the box. Give a suitable title to the story. The beginning and the end of the story have been given. Write in your notebook.







a farmer – four sons – fell ill – quarrelled – sticks – broke –
bundle of sticks – unable to break – decided not to
quarrel Once there lived a farmer. He had four sons
They decided not to quarrel. They lived happily.



<hr/> <hr/> <hr/> <hr/> <hr/> <hr/> <hr/> <hr/> <hr/> <hr/>

ENVIRONMENTAL SCIENCE

1. Match the following.


(i) 	(a) Brother
(ii) 	(b) Mother
(iii) 	(c) Grandfather
(iv) 	(d) Sister
(v) 	(e) Father
(vi) 	(f) Grandmother

2. Put the sentences in correct columns.


- a. Obey your elders.
- b. Never help your family members
- c. Eat meals together
- d. Do not lie.
- e. Make fun of others.
- f. be happy and keep others happy
- g. be tolerant
- h. Do not keep surroundings clean
- i. Greet everybody in the morning and night
- j. Do not be polite to guests.

Dos	Don'ts




3. Write a note about the function recently held in your family.



4. Paste photo of your family.



5. Paste four pictures showing care given to physically challenged people.



6. One day when you were going to school, you saw a blind man crossing the road. How would you help him?

7. How do you care for your grandfather/grandmother? Write four sentences about it.

8. Look at the picture and answer the questions that follow.



- a. What can you see in the picture?
- b. What does it show about the child's behavior?

9. Make a family tree. How many generations are there in the family? Write the name of each of the family member?

हिंदी

१. आपने अपनी गर्मी की छुट्टियां किस प्रकार बिताई ? इस विषय पर १०० शब्दों में निबंध लिखिए ।

[illegible]

[illegible]

अपने हिंदी -१ पुस्तक से "काश ! अगर मैं चिड़िया होती " तथा "गप्पों की दुकान " कवितायें याद करें।

अपनी हिंदी व्याकरण की पाठ्य पुस्तक से पाठ १ से ५ तक की सभी परिभाषाएं याद करें ।

MATHEMATICS

1. Write the following numbers in words.

i) 75 = _____

ii) 450 = _____

iii) 340 = _____

iv) 360 = _____

2. Encircle the greatest number :

a. 105, 234, 345, 100, 234

b. 697, 575, 634, 576, 346

c. 345, 465, 574, 374, 579

d. 765, 756, 384, 576, 876

3. Write each of the following in short form :

a. $5000 + 300 + 30 + 3 =$ _____.

b. $4000 + 200 + 20 + 3 =$ _____.

c. $7000 + 400 + 50 + 5 =$ _____.

d. $6000 + 300 + 40 + 5 =$ _____.

4. Write the successor of each of the following numbers :

- a. 589
- b. 987
- c. 3456
- d. 8746

5. Arrange the following in ascending order :

- a. 3872, 4681, 6791, 5671 _____, _____, _____, _____
- b. 8923, 2344, 7846, 4742 _____, _____, _____, _____
- c. 2364, 2845, 6837, 5732 _____, _____, _____, _____
- d. 9457, 4642, 4785, 2713 _____, _____, _____, _____

6. Arrange the following in descending order :

- a. 2345, 4664, 3245, 3455 _____, _____, _____, _____
- b. 4744, 2344, 6433, 1214 _____, _____, _____, _____
- c. 4633, 3212, 4563, 1233 _____, _____, _____, _____
- d. 3474, 3243, 2144, 2342 _____, _____, _____, _____

7. Write the Hindu – Arabic numerals for the following :

a. XV = _____

b. XVII = _____

c. XXXVI = _____

d. XXVII = _____

8. Write the Roman Numerals for the following :

a. 36 = _____

b. 45 = _____

c. 77 = _____


d. 41 = _____

9. Find the sum :


a. $1233 + 3342 + 3243$




b. $3442 + 343 + 3242$



c. $2421 + 3423 + 45 + 4$



d. $4234 + 465 + 32 + 43 + 522$




10. Write in columns and find the differences :

a. $2378 - 1123$

b. $8967 - 3432$

c. $8362 - 4632$

d. $9876 - 3456$



11. Fill in the blanks

a. 4 thousand - _____ thousand = 2 thousand

b. 7 thousand - _____ thousand = 5 thousand

c. $9789 - 2000 =$ _____

d. $2373 - 1000 =$ _____

e. By how much is 4556 greater than 3378?

f. By how much is 1788 less than 2000?

g. What number must be added to 7654 to get 8765

h. The Roman numeral for 7 is _____.

i. Roman numeral 'X' can be repeated _____ times at the most.

j. The number for the Roman numeral XXVI is _____.

12. Write each of the following in the expanded form :

a. $167 = \underline{\hspace{1cm}} + \underline{\hspace{1cm}} + \underline{\hspace{1cm}}$


b. $645 = \underline{\hspace{1cm}} + \underline{\hspace{1cm}} + \underline{\hspace{1cm}}$

c. $867 = \underline{\hspace{1cm}} + \underline{\hspace{1cm}} + \underline{\hspace{1cm}}$

d. $768 = \underline{\hspace{1cm}} + \underline{\hspace{1cm}} + \underline{\hspace{1cm}}$

SCIENCE

1. Write 6 differences between living and nonliving things.



2. Draw 2 pictures of each of the following.

a. Living Things



b. Non Living Things

c. Man made Things

d. Natural Things

3. Give two examples of each of the following.

a. Stem: _____


b. Root: _____

c. Leaf: _____


d. Flower: _____

e. Fruit: _____

4. Draw a plant and label its parts.



5. Draw a leaf and label its parts.



6. Put on your thinking cap and answer the question.

If you eat an apple seed, can an apple tree grow inside your stomach?





7. Look at the picture given below and list two living and two nonliving things.

Living Things- _____

Nonliving Things- _____




8. Write Yes or No and complete the following table.

Objects	Does it need food?	Does it need air?	Does it need water?	Does it produce young ones?
				
				
				
				

SOCIAL SCIENCE

1. Look at the given picture and answer the questions that follow.



a. How many planets are there in our Solar System?

b. Name the farthest planet from the Sun.

2. The Earth completes one rotation in 24 hours. It takes $365\frac{1}{2}$ days to complete one revolution. How long do other planets take for completing one rotation and revolution? Find out.

3. Identify the name the physical features shown in the image.



Mountain

River

Valley

Hill

Lake

4. On a physical map of India, locate and mark the following.

- a. Thar Desert
- b. Deccan Plateau
- c. Islands

5. Locate at the given picture and answer the questions that follow.




a. Which animal is shown here?

b. In which part of India is it mostly found?

6. Choose any one state from each of India's six physical divisions. Find out about its famous food items.

7. Collect pictures of the dresses worn by the people living in the India's neighboring countries and make a collage.



8. Study about various historical figures and their contributions to society, such as Mahatma Gandhi, Abraham Lincoln, or Mother Teresa. Write a short paragraph about the person and why they are important.